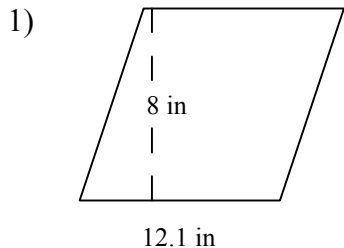


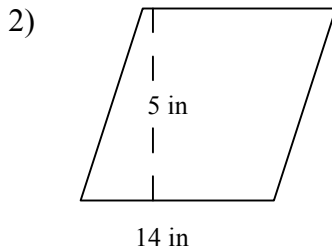
Name _____

AREA OF A PARALLELOGRAM /6th Grade Mrs. Faour

Directions: Find the area of parallelogram. The formula to calculate the area of a parallelogram is $Area = the\ width\ of\ the\ base \times the\ vertical\ height$. Write your answer in the space provided

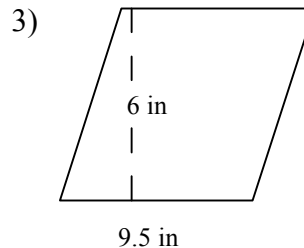


Area _____

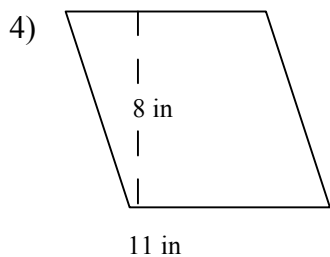


Area $A=BXH=$

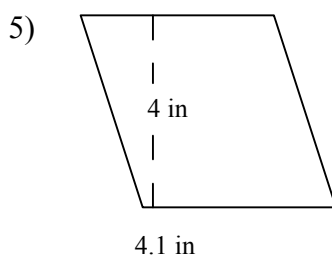
$5 \times 14 = 70\ sqin$ _____



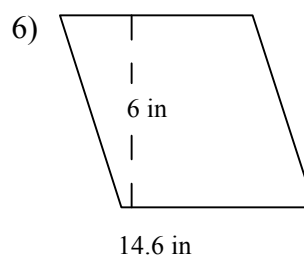
Area _____



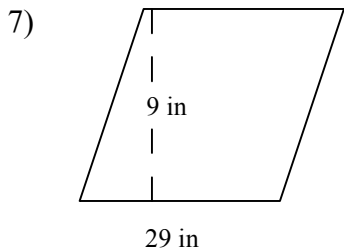
Area _____



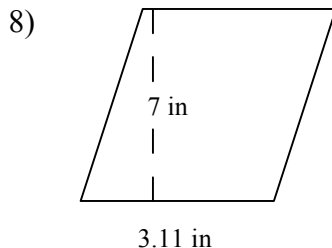
Area _____



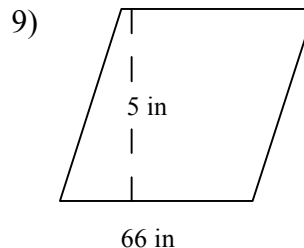
Area _____



Area _____



Area _____



Area _____