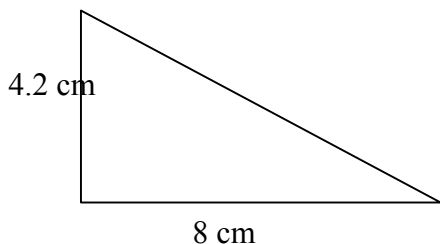


name \_\_\_\_\_

**AREA OF A TRIANGLE /Grade 6<sup>th</sup>-Mrs. Faour**

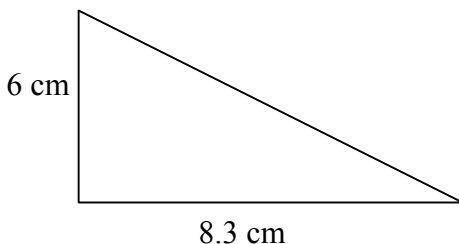
**Directions:** Find the area of each triangle. The formula to calculate the area of a triangle is  $Area = \frac{1}{2} \times width\ of\ the\ base \times vertical\ height$ . Write your answer in the space provided.

1)



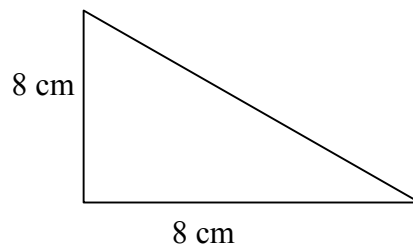
Area \_\_\_\_\_

2)



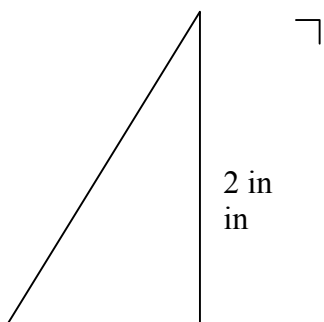
Area \_\_\_\_\_

3)



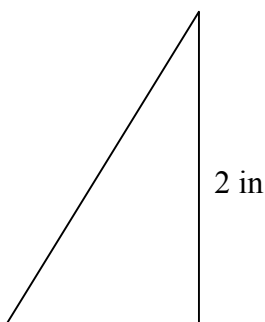
Area \_\_\_\_\_

4)



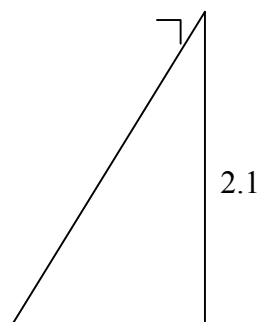
Area \_\_\_\_\_

5)



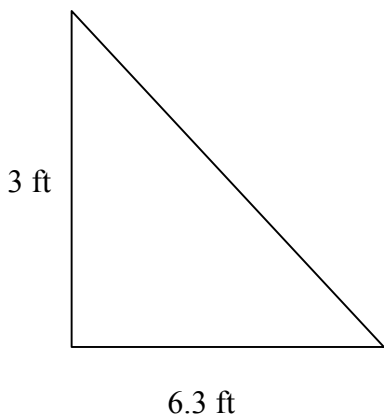
Area \_\_\_\_\_

6)



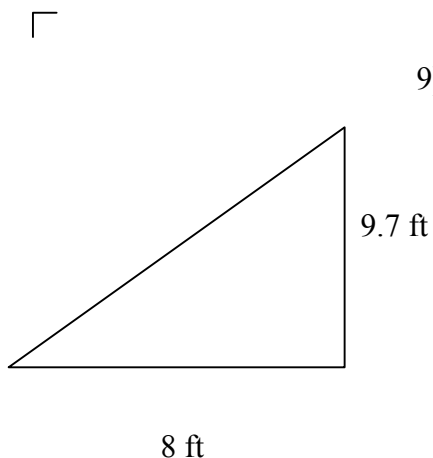
Area \_\_\_\_\_

7)



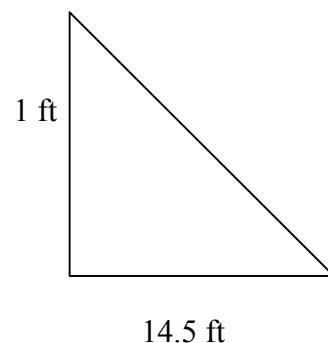
Area

8)



Area

9)



Area