



Grado 1 Matemáticas

Paquete de actividades para
el hogar del maestro

Este Paquete de actividades para el hogar incluye un conjunto de 16 problemas prácticos que están alineados con importantes conceptos de matemáticas en los que los estudiantes ya han trabajado durante este año.

Debido a que el grado de avance varía de un salón a otro, siéntase con la libertad de seleccionar las páginas que se alineen con los temas que sus estudiantes ya han cubierto.

El Paquete de actividades para el hogar incluye instrucciones para los padres que se pueden imprimir y enviar a casa.


Este es un Paquete de actividades para el hogar. La Guía del maestro incluye los mismos conjuntos de práctica que la versión del estudiante, con respuestas como referencia.

¡Mire los conceptos
de Matemáticas del
Grado 1 que cubre
este paquete!



Grado 1 Conceptos de matemáticas cubiertos en este paquete

Concept <i>Concepto</i>	Practice <i>Práctica</i>	Fluency and Skills Practice <i>Fluidez y práctica de destrezas</i>	Page <i>Página</i>
Using Strategies to Add <i>Usar estrategias para sumar</i>	1	Counting On to Add <i>(Contar hacia adelante para sumar)</i>	3
	2	Using Doubles and Near Doubles <i>(Usar dobles y casi dobles)</i>	5
	3	Adding in Any Order with Near Doubles <i>(Sumar en cualquier orden con casi dobles)</i>	7
	4	Making a Ten to Add <i>(Formar una decena para sumar)</i>	9
Using Strategies to Subtract <i>Usar estrategias para restar</i>	5	Understanding of Missing Addends <i>(Comprender los sumandos que faltan)</i>	11
	6	Counting On to Subtract <i>(Contar hacia adelante para restar)</i>	12
	7	Making a Ten to Subtract <i>(Formar una decena para restar)</i>	14
Understanding Addition and Subtraction <i>Comprender la suma y la resta</i>	8	Number Partners for 10 <i>(Parejas de números para 10)</i>	16
	9	Adding and Subtracting in Word Problems <i>(Sumar y restar en problemas verbales)</i>	18
	10	Subtracting to Compare in Word Problems <i>(Restar para comparar en problemas verbales)</i>	20
	11	Understanding of True and False Equations <i>(Comprender ecuaciones verdaderas y falsas)</i>	22
Understanding Place Value <i>Comprender el valor posicional</i>	12	Understanding of Teen Numbers <i>(Comprender los números del 11 al 19)</i>	23
Adding and Subtracting within 20 <i>Sumar y restar hasta 20</i>	13	Finding Totals Greater Than 10 <i>(Encontrar totales mayores que 10)</i>	25
	14	Adding Three Numbers <i>(Sumar tres números)</i>	26
	15	Finding the Unknown Number <i>(Hallar el número desconocido)</i>	28
	16	Solving Word Problems to 20 <i>(Resolver problemas verbales hasta 20)</i>	30

Count on to add.**Example**

5



6


7

5

+

2

=

7**1**

7

8

7

+

1

=

8**2**

8

910

8



+

2

=


10

3



$$7 + 2 = \underline{9}$$

4



$$6 + 3 = \underline{9}$$

Discuss It

Did you always start at 1 when you counted? Explain.

Sample answer: No. I started with the first number of blocks and then counted on from that number.

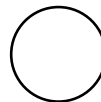
Name _____

Use what you know about doubles to solve.**Example**

1 black sticker. 1 white sticker.

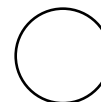
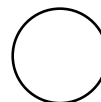
How many stickers in all?

$1 + 1 = \underline{2}$

 $\underline{2}$ stickers**1** 1 black sticker. 2 white stickers.

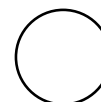
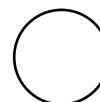

How many stickers in all?

$1 + 2 = \underline{3}$

 $\underline{3}$ stickers**2** 3 white stickers. 3 black stickers.

How many stickers in all?

$3 + 3 = \underline{6}$

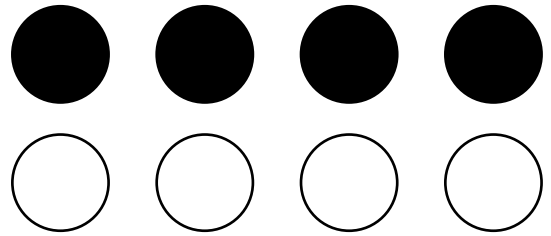
 $\underline{6}$ stickers

Name _____

- 3** 4 black stickers. 4 white stickers.
How many stickers in all?

$$4 + 4 = \underline{8}$$


8 stickers



- 4** 4 black squares.
5 white squares.
How many squares in all?

$$4 + 5 = \underline{9}$$

9 squares



Discuss It

How is $3 + 3$ like $3 + 4$? How is it different?

Answers will vary. Possible answer: $3 + 3$ is a doubles fact and $3 + 4$ is 1 more.

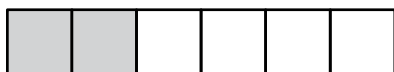
Name _____

Use the blocks. Complete the addition equations.

Example



$$4 + \underline{2} = 6$$



$$2 + \underline{4} = 6$$




$$5 + \underline{1} = 6$$



$$1 + \underline{5} = 6$$



$$6 + \underline{0} = 6$$



$$0 + \underline{6} = 6$$



$$5 + \underline{2} = 7$$



$$2 + \underline{5} = 7$$



$$3 + \underline{4} = 7$$



$$4 + \underline{3} = 7$$

**Adding in Any Order
with Near Doubles** *continued*

Name _____



$$1 + \underline{7} = 8$$



$$7 + \underline{1} = 8$$



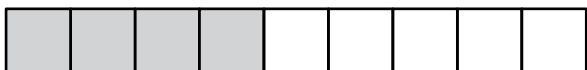
$$6 + \underline{2} = 8$$



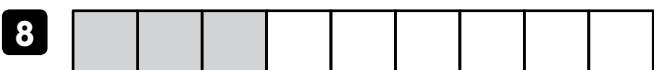
$$2 + \underline{6} = 8$$



$$5 + \underline{4} = 9$$



$$4 + \underline{5} = 9$$



$$3 + \underline{6} = 9$$

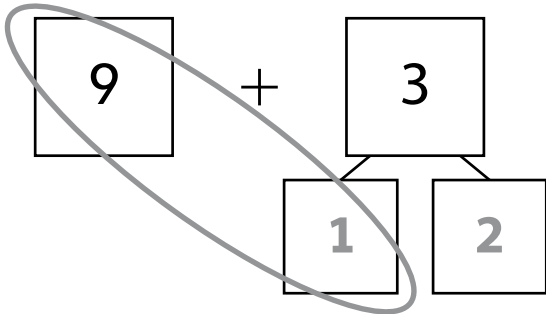


$$6 + \underline{3} = 9$$

Name _____

Fill in the number bonds to make a ten.

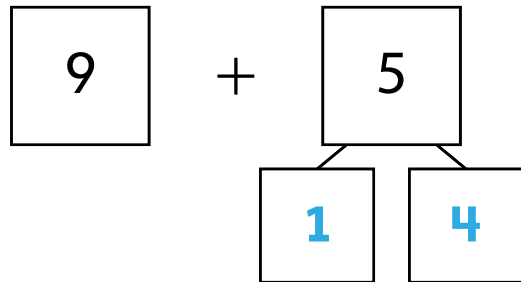
1 Find $9 + 3$.



$10 + 2 = \underline{12}$

$9 + 3 = \underline{12}$

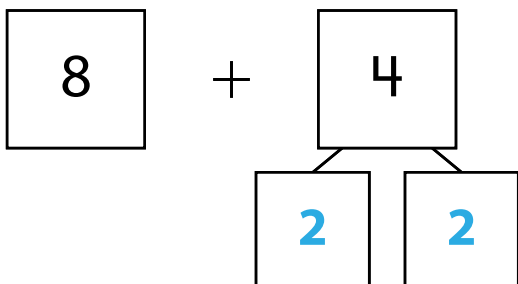
2 Find $9 + 5$.



$10 + 4 = \underline{14}$

$9 + 5 = \underline{14}$

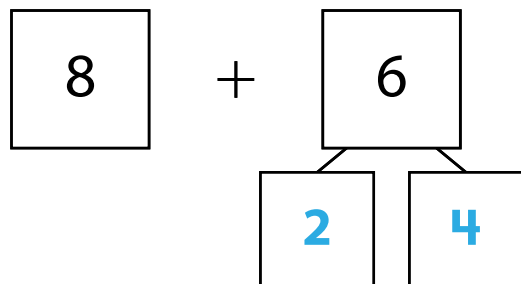
3 Find $8 + 4$.



$10 + 2 = \underline{12}$

$8 + 4 = \underline{12}$

4 Find $8 + 6$.

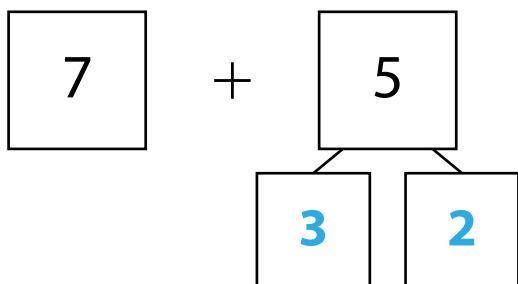


$10 + 4 = \underline{14}$

$8 + 6 = \underline{14}$

Name _____

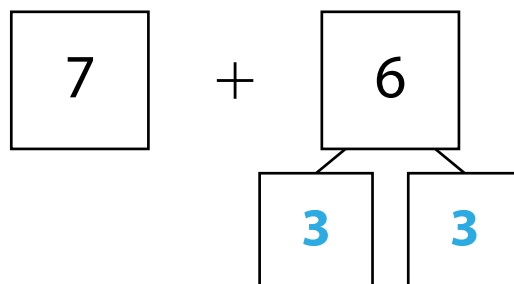
5 Find $7 + 5$.



$$10 + 2 = \underline{12}$$

$$7 + 5 = \underline{12}$$

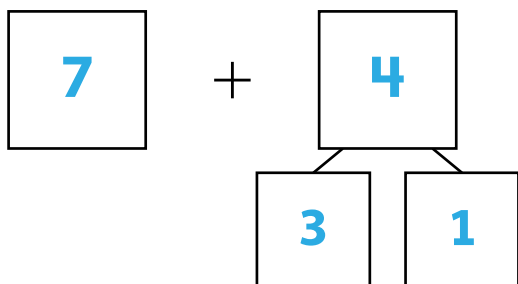
6 Find $7 + 6$.



$$10 + 3 = \underline{13}$$

$$7 + 6 = \underline{13}$$

7 Find $7 + 4$.



$$10 + 1 = \underline{11}$$

$$7 + 4 = \underline{11}$$

Discuss It

How does making a ten help you add two numbers?

Answers will vary. Possible answer: Adding two numbers is easier when one of the numbers is ten.

Name _____

Use addition to help you subtract.**1** Find $6 - 5$.

$$5 + \underline{1} = 6$$

$$6 - 5 = \underline{1}$$

2 Find $7 - 6$.

$$6 + \underline{1} = 7$$

$$7 - 6 = \underline{1}$$

3 Find $5 - 2$.

$$2 + \underline{3} = 5$$

$$5 - 2 = \underline{3}$$

4 Find $6 - 4$.

$$4 + \underline{2} = 6$$

$$6 - 4 = \underline{2}$$

5 Find $8 - 4$.

$$4 + \underline{4} = 8$$

$$8 - 4 = \underline{4}$$

6 Find $9 - 7$.

$$7 + \underline{2} = 9$$

$$9 - 7 = \underline{2}$$

7 Write an addition equation that helps you find $6 - 3$.
Then complete the subtraction equation.

$$\underline{3} + \underline{3} = \underline{6}$$

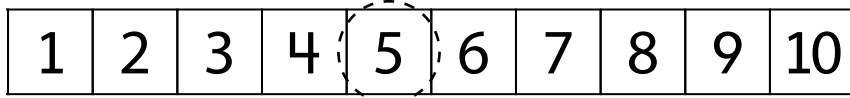
$$6 - 3 = \underline{3}$$

Discuss It

How can an addition equation help you solve a subtraction equation? **Answers will vary. Possible answer: I can write a missing addend equation, and then count on to find the missing addend.**

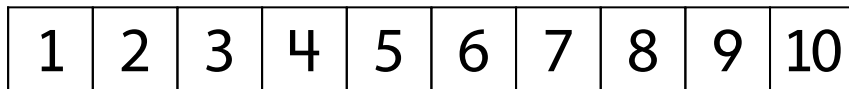
ExampleFind $5 - 3$.

Start at 3. Count on to 5.



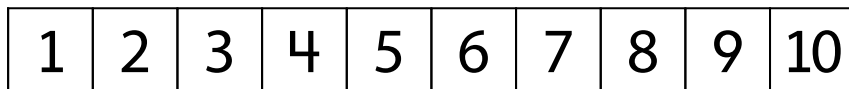
$3 + \underline{2} = 5$

$5 - 3 = \underline{2}$

1 Find $6 - 4$.

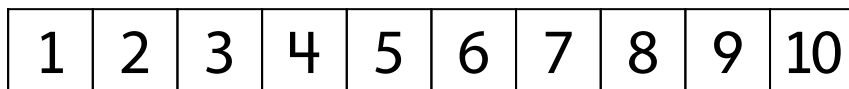
$4 + \underline{2} = 6$

$6 - 4 = \underline{2}$

2 Find $7 - 3$.

$3 + \underline{4} = 7$

$7 - 3 = \underline{4}$

3 Find $8 - 6$.

$6 + \underline{2} = 8$

$8 - 6 = \underline{2}$

Name _____

4 Find $9 - 8$.

1	2	3	4	5	6	7	8	9	10
---	---	---	---	---	---	---	---	---	----

$8 + \underline{1} = 9$

$9 - 8 = \underline{1}$

5 Find $6 - 5$.

1	2	3	4	5	6	7	8	9	10
---	---	---	---	---	---	---	---	---	----

$5 + \underline{1} = 6$

$6 - 5 = \underline{1}$

6 Find $9 - 4$.

1	2	3	4	5	6	7	8	9	10
---	---	---	---	---	---	---	---	---	----

$4 + \underline{5} = 9$

$9 - 4 = \underline{5}$

7 Find $8 - 2$.

1	2	3	4	5	6	7	8	9	10
---	---	---	---	---	---	---	---	---	----

$2 + \underline{6} = 8$

$8 - 2 = \underline{6}$

Discuss It

How is solving $6 - 4$ the same as solving $9 - 4$?

How is it different?

I start at the number 4 for both problems. For Problem $6 - 4$, I count on to 6. For $9 - 4$, I count on to 9.

Making a Ten to Subtract

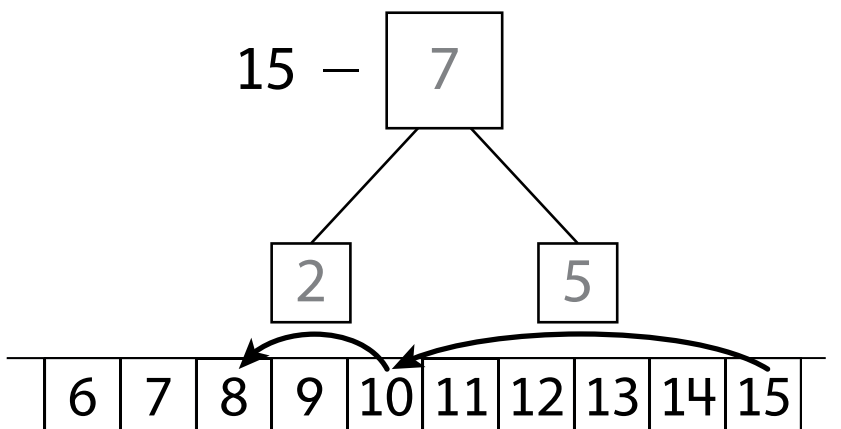
Name _____

1 Find $15 - 7$.

$$15 - \underline{5} = 10$$

$$10 - 2 = \underline{8}$$

$$15 - 7 = \underline{8}$$

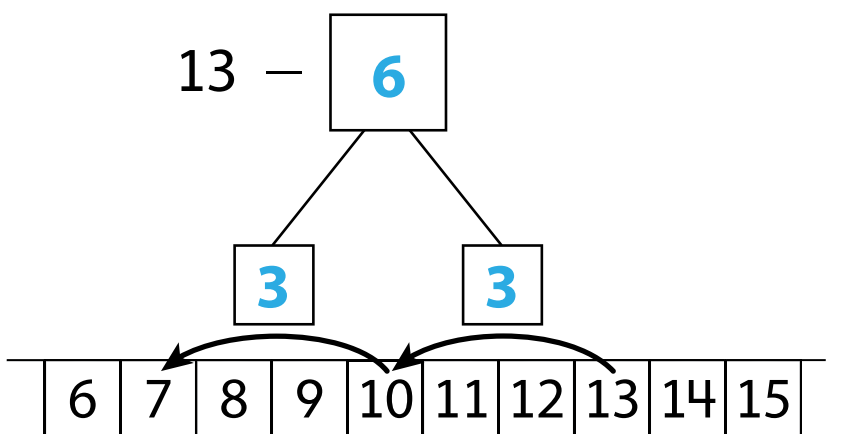


2 Find $13 - 6$.

$$13 - \underline{3} = 10$$

$$10 - 3 = \underline{7}$$

$$13 - 6 = \underline{7}$$

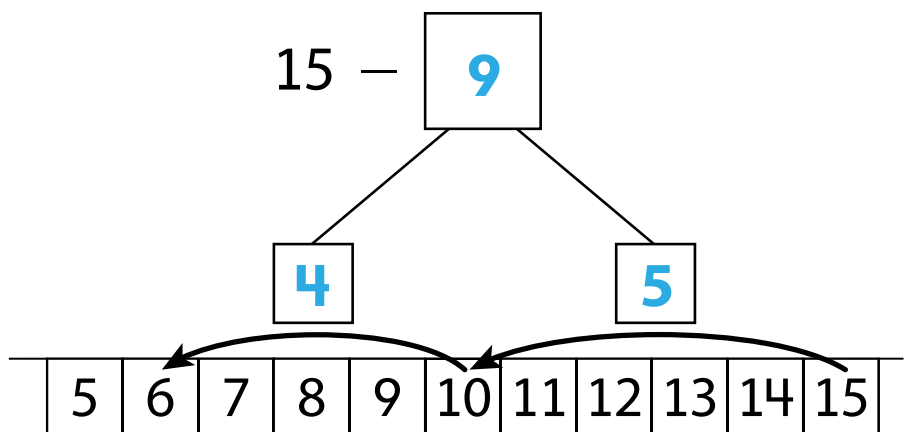


3 Find $15 - 9$.

$$15 - \underline{5} = 10$$

$$10 - 4 = \underline{6}$$

$$15 - 9 = \underline{6}$$



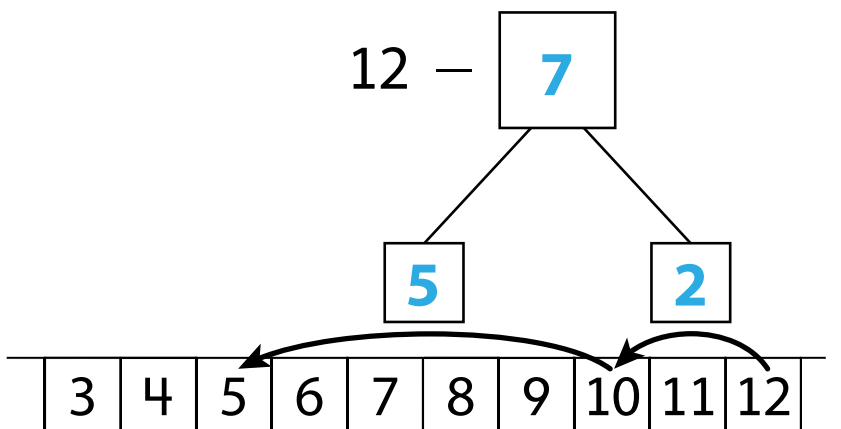
Name _____

4 Find $12 - 7$.

$$12 - \underline{2} = 10$$

$$10 - 5 = \underline{5}$$

$$12 - 7 = \underline{5}$$

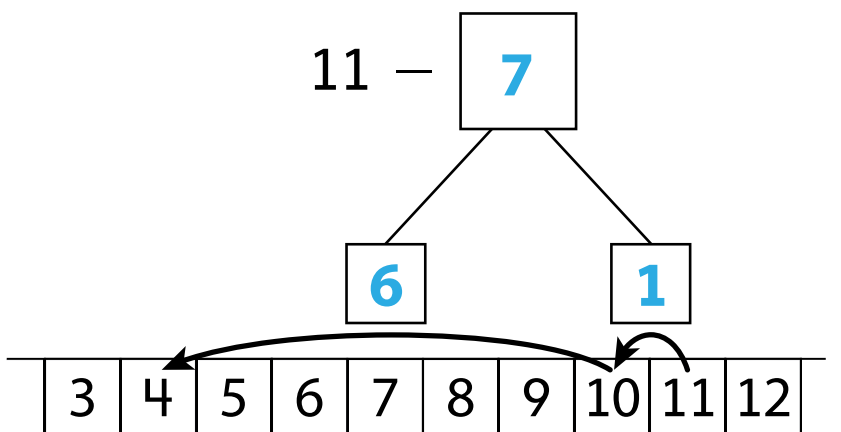


5 Find $11 - 7$.

$$11 - \underline{1} = 10$$

$$10 - 6 = \underline{4}$$

$$11 - 7 = \underline{4}$$

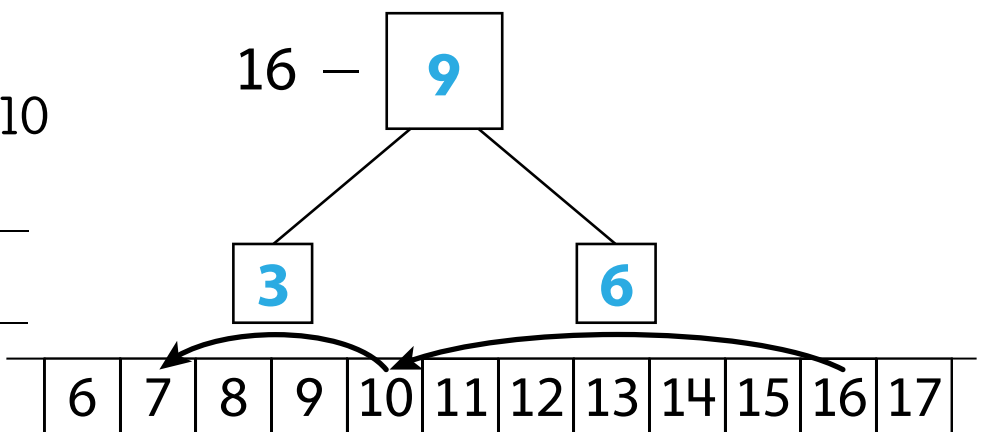


6 Find $16 - 9$.

$$16 - \underline{6} = 10$$

$$10 - 3 = \underline{7}$$


$$16 - 9 = \underline{7}$$



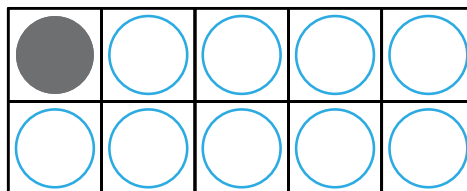
Name _____

Draw counters to make 10. Then complete the equation.

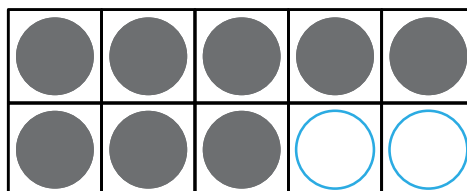
$10 = 9 + \underline{1}$



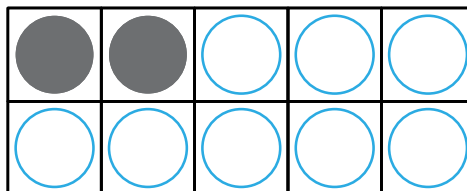
$10 = 1 + \underline{9}$



$10 = 8 + \underline{2}$

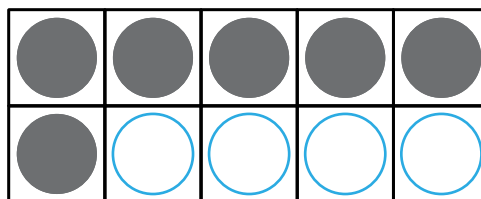


$10 = 2 + \underline{8}$

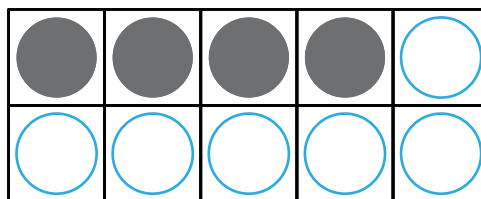


Name _____

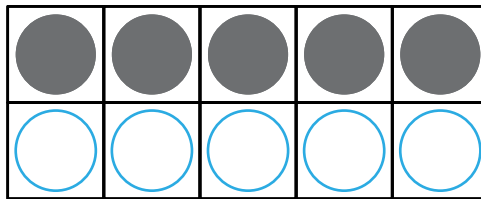
$$10 = 6 + \underline{4}$$



$$10 = 4 + \underline{6}$$



$$10 = 5 + \underline{5}$$



Solve each problem.

- 1** Marai sees 8 dogs at the park.

Some dogs go home.

Now Marai sees 5 dogs.

How many dogs go home?

1	2	3	4	5	6	7	8	9	10
---	---	---	---	---	---	---	---	---	----

$$5 + \underline{3} = 8 \qquad 8 - \underline{3} = 5$$

3 dogs go home.

- 2** Ben has 7 hats. 1 hat is red.

The rest are blue.

How many hats are blue?

1	2	3	4	5	6	7	8	9	10
---	---	---	---	---	---	---	---	---	----

$$7 = 1 + \underline{6} \qquad 7 - \underline{6} = 1$$

6 hats are blue.

3 Asia has 7 books. She buys more books.

Now Asia has 9 books.

How many books does she buy?

1	2	3	4	5	6	7	8	9	10
---	---	---	---	---	---	---	---	---	----

$$7 + \underline{2} = 9 \qquad 9 - \underline{2} = 7$$

Asia buys 2 books.

4 Jake has 8 games. He gives some away.

Now he has 3 games.

How many games does Jake give away?

1	2	3	4	5	6	7	8	9	10
---	---	---	---	---	---	---	---	---	----

$$3 + \underline{5} = 8 \qquad 8 - \underline{5} = 3$$

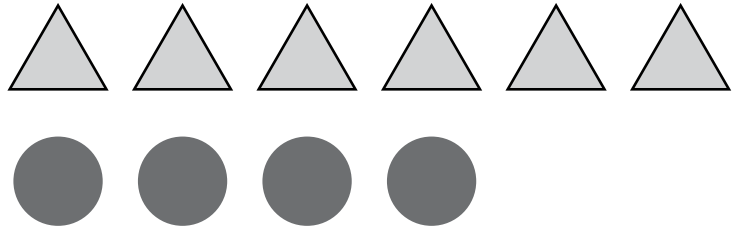
Jake gives 5 games away.

Solve the subtraction problems.

- 1** There are 6 triangles. There are 4 circles.
How many more triangles are there?

$$6 - 4 = \underline{2}$$

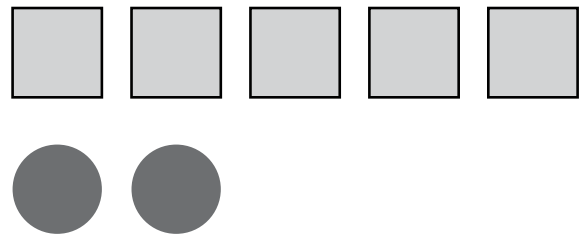
2 more triangles



- 2** There are 5 squares. There are 2 circles.
How many more squares are there?

$$5 - 2 = \underline{3}$$

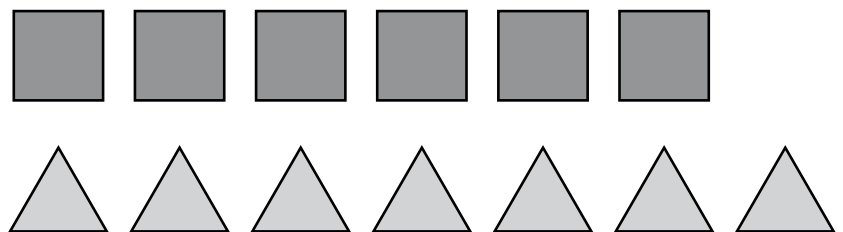
3 more squares



- 3** There are 7 triangles. There are 6 squares.
How many more triangles are there?

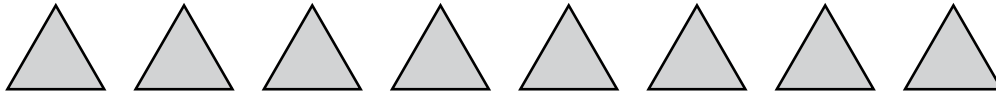
$$7 - 6 = \underline{1}$$

1 more triangle



4 There are 8 triangles and 5 circles.

How many fewer circles than triangles are there?

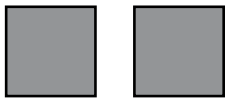
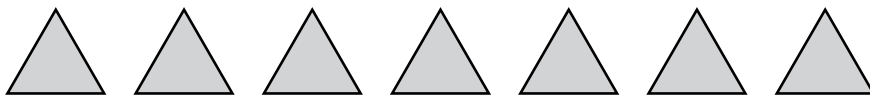


$$8 - 5 = \underline{3}$$

3 fewer triangles

5 There are 2 squares and 7 triangles.

How many fewer squares than triangles are there?



$$7 - 2 = \underline{5}$$

5 fewer squares

Choose a number from the box to complete the equation.

Example

0 1 2

$$2 + 0 = \underline{1} + 1$$

1

0 1 2

$$2 + 1 = 1 + \underline{2}$$

2

1 2 3

$$3 + 2 = \underline{2} + 3$$

3

1 2 3

$$3 + 2 = 4 + \underline{1}$$

4

0 1 2

$$6 + 0 = 5 + \underline{1}$$

5

4 5 6

$$3 + 3 = \underline{6} + 0$$

6

2 3 4

$$4 + 3 = 5 + \underline{2}$$

7

0 1 2

$$6 + 1 = 7 + \underline{0}$$

8

1 2 3

$$4 + 4 = 5 + \underline{3}$$

9

0 1 2

$$1 + 8 = 7 + \underline{2}$$

Draw lines to match the numbers.



11

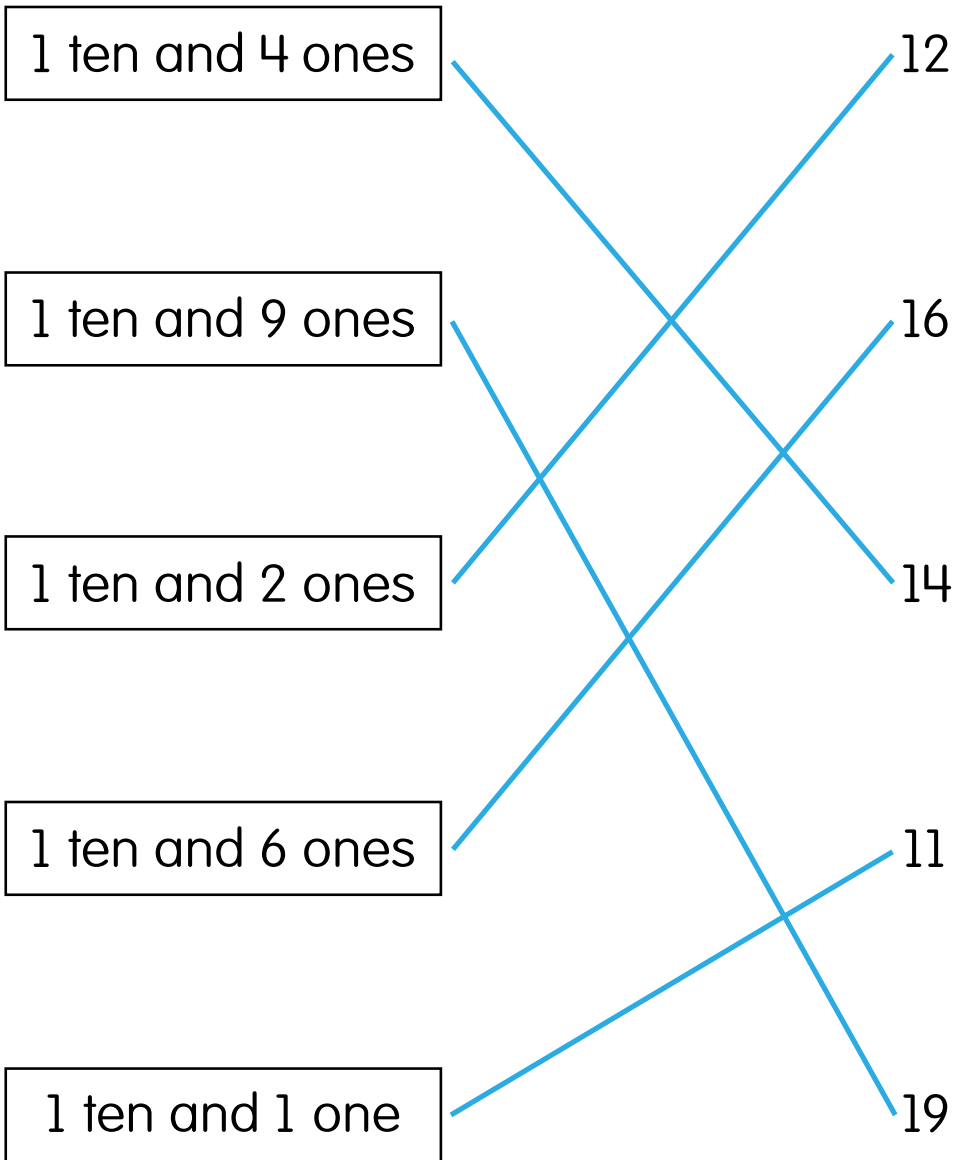
17

15

18

13

Draw lines to match the numbers.



Discuss It

What is the same about each teen number? What is different? **Every teen number has one ten. The number of ones for each teen number is different.**

Name _____

Add.

1 $9 + 3 = \underline{12}$

2 $3 + 9 = \underline{12}$

3 $8 + 6 = \underline{14}$

4 $6 + 8 = \underline{14}$

5 $4 + 9 = \underline{13}$

6 $5 + 7 = \underline{12}$

7 $6 + 7 = \underline{13}$

8 $7 + 8 = \underline{15}$

9 $10 + 9 = \underline{19}$

10 $9 + 8 = \underline{17}$

11 $6 + 3 + 4 = \underline{13}$

12 $5 + 9 + 1 = \underline{15}$

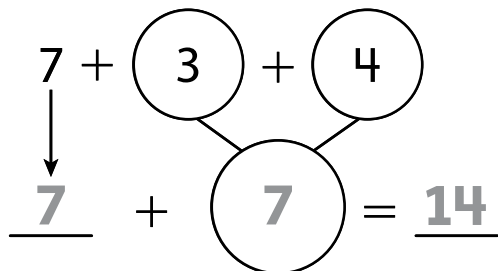
Discuss It

Explain how you solved Problem 11.

Answers will vary. Possible answer: I used the Commutative Property to rewrite the problem as $6 + 4 + 3$. Then I added $6 + 4$ to make 10 then added on the 3 to get 13.

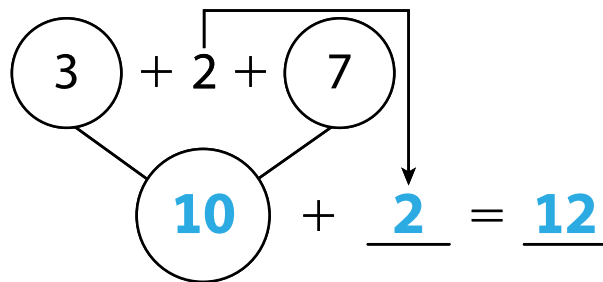
Name _____

1 Find $7 + 3 + 4$.



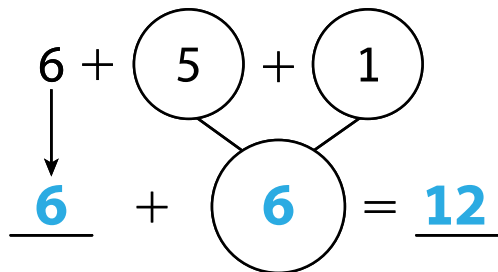
$7 + 3 + 4 = \underline{14}$

2 Find $3 + 2 + 7$.



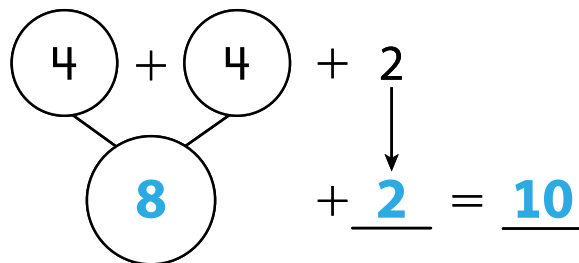
$3 + 2 + 7 = \underline{12}$

3 Find $6 + 5 + 1$.



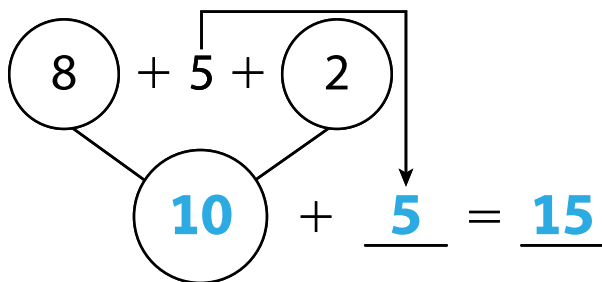
$6 + 5 + 1 = \underline{12}$

4 Find $4 + 4 + 2$.



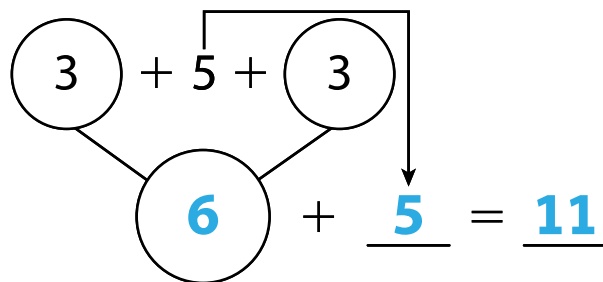
$4 + 4 + 2 = \underline{10}$

5 Find $8 + 5 + 2$.



$8 + 5 + 2 = \underline{15}$

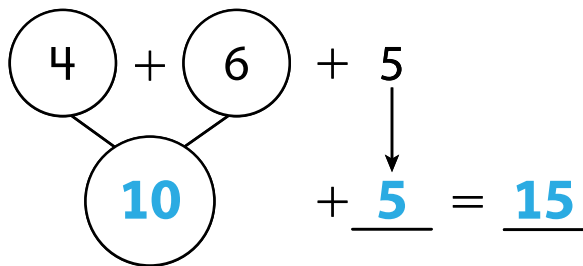
6 Find $3 + 5 + 3$.



$3 + 5 + 3 = \underline{11}$

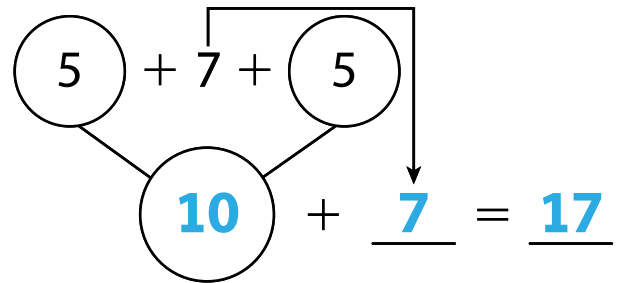
Name _____

7 Find $4 + 6 + 5$.



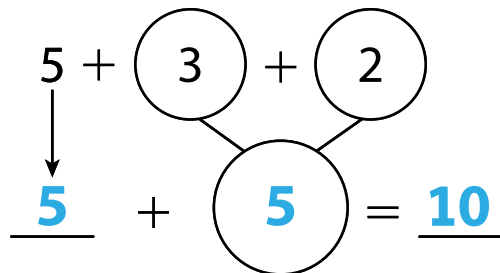
$$4 + 6 + 5 = \underline{15}$$

8 Find $5 + 7 + 5$.



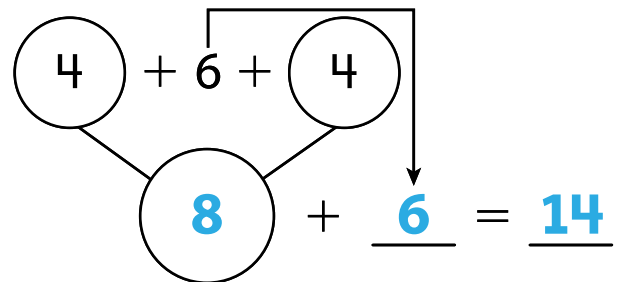
$$5 + 7 + 5 = \underline{17}$$

9 Find $5 + 3 + 2$.



$$5 + 3 + 2 = \underline{10}$$

10 Find $4 + 6 + 4$.



$$4 + 6 + 4 = \underline{14}$$

11 When solving $4 + 6 + 4$, Ava adds $4 + 6$ first.

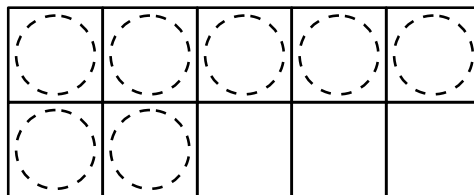

Rico adds $4 + 4$ first. Who is correct? Why?

Both are correct. Answers will vary. Possible answer: With the same 3 addends, you can add any two addends first and you will get the same total.

Name _____

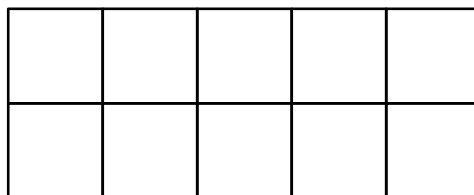
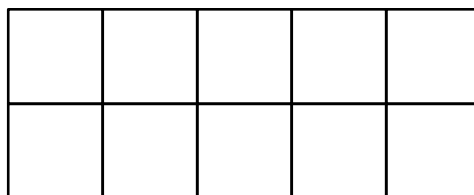
1 Find the missing number.

$$17 - \underline{8} = 9$$



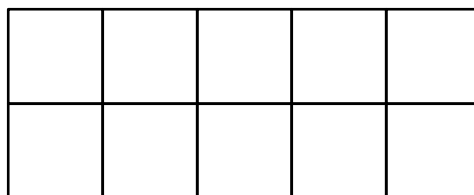
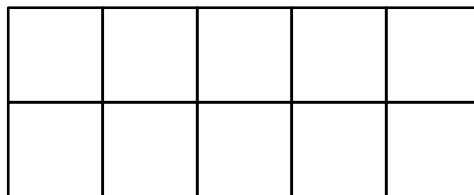
2 Find the missing number.

$$\underline{13} - 8 = 5$$



3 Find the missing number.

$$15 - \underline{9} = 6$$



Finding the Unknown Number *continued*

Name _____

- 4 Find the missing number.

$$7 = \underline{14} - 7$$

- 5 Find the missing number.

$$8 = 12 - \underline{4}$$

- 6 Find the missing number.

$$\underline{18} - 9 = 9$$

- 7 Find the missing number.

$$16 - \underline{9} = 7$$

- 8 Find the missing number.

$$15 - \underline{7} = 8$$

- 9 Find the missing number.

$$5 = \underline{14} - 9$$

- 10 Find the missing number.

$$\underline{17} - 7 = 10$$

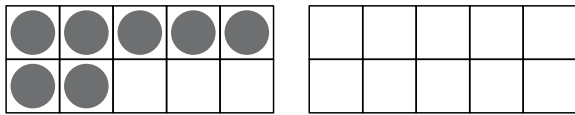
Discuss It

- 11 How did you use the 10-frames to find the missing number in Problem 4?

Answers will vary. Possible answer: First, I drew 7 circles because that is the answer. Then, I drew 7 more circles because that is how many I am subtracting. Finally, I counted the number of circles in the 10-frames. There are 14 circles, so the answer is 14.

Name _____

- 1** Amy has some crayons.
She finds 7 more crayons.
Now she has 18 crayons.
How many crayons did she have at the start?



$$\underline{11} + 7 = 18$$

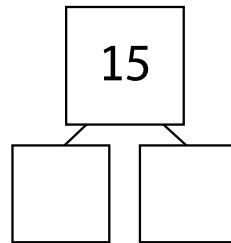
11 crayons

- 3** Marco has 16 flowers.
He gives some to Alex.
Now Marco has 8 flowers.
How many did he give to Alex?

$$16 - \underline{8} = \underline{8}$$

8 flowers

- 2** There are 15 fish in a tank.
7 of the fish are orange.
The rest are white.
How many are white?



$$15 - \underline{7} = \underline{8}$$

8 white fish

- 4** There are 12 bagels in a box.
Some bagels are eaten.
Now there are 4 bagels.
How many bagels were eaten?

$$12 - \underline{8} = \underline{4}$$

4 bagels

Solving Word Problems to 20 *continued*

Name _____

- 5** Mica eats 4 fewer pretzels than Wyatt. Wyatt eats 14 pretzels. How many pretzels did Mica eat?

$$\underline{14} - \underline{4} = \underline{10}$$

10 pretzels

- 6** Pete reads for 9 minutes. The next day he reads for 6 minutes. How many minutes did he read altogether?

$$\underline{9} + \underline{6} = \underline{15}$$

15 minutes