

Math Skills Practice

Addition

Subtraction

Place Value

Skip Counting

Time to the 1/2 hour

Missing Addends

Double Digit Addition

Double Digit Subtraction

Greater than/Less Than

Triple Digit Addition

Math Skills Practice Worksheet (Left Side)

Includes a grid of math problems and a small cartoon monster illustration.

2 + 3	5 + 12	63 - 52	5 + 16	75 - 63	40 + 60
89 - 27	67 + 64	12 + 8	78 - 11	17 + 9	43 - 24
74 + 24	9 + 4	4 + 5	23 + 78	15 + 6	58 - 37

Math Skills Practice Worksheet (Right Side)

Includes a grid of math problems and a small cartoon monster illustration.

1 + 4	18 - 5	11 + 3	13 + 13	45 + 33	9 + 4
15 + 3	10 + 16	12 + 8	3 + 5	9 + 2	4 + 8
17 + 3	12 + 8	3 + 5	9 + 2	9 + 2	17 + 4
5 + 9	7 + 8	7 + 8	57 + 39	15 + 1	15 + 1
7 + 0	4 + 5	14 + 1	15 + 1	15 + 1	15 + 1



About this resource

Hello Educator!

Thank you for your purchase. I hope you find it useful. This Math skills practice resource reviews many basic foundational skills. This resource was created using first grade common core standards. I use these in the 4th quarter of my first-grade class. It is perfect for first grade review, advanced first graders, second grader and lower performing third graders. These practice pages can be used for:

Homework

Math "Warm- up"

Fast Finishers

Independent Review Time

Skill Assessment

Home School

By purchasing and/or downloading this electronic file, you agree to the terms of use stated below.

For personal use/single classroom use only. No part of this document may be distributed, posted on the internet, copied, sold or edited without the direct permission from the author. Violations are subject to the penalties of the Digital Millennium Act. To purchase additional sharing licenses, please visit my store. Duplication, sharing with co-workers, an entire school or district or posting on a blog/website violates copyright. This includes shared servers.

If you have any questions or concerns, please feel free to contact me at:

<https://www.teacherspayteachers.com/Store/KosmalaKorner>

Credits:



Preschool-For-Pirates-And-Princesses


go2graph@go2graph.com

Other Math practice can be purchased at:

<https://www.teacherspayteachers.com/Store/KosmalaKorner>




Name _____


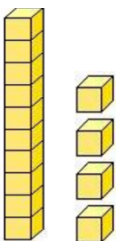


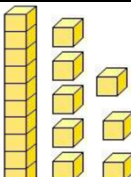



 _____	$\begin{array}{r} 9 \\ - 3 \\ \hline \end{array}$	$\begin{array}{r} 7 \\ + \square \\ \hline 18 \end{array}$		
$\begin{array}{r} 18 \\ - 5 \\ \hline \end{array}$	$\begin{array}{r} 10 \\ + \square \\ \hline 19 \end{array}$	skip count 40, __, 60	$\begin{array}{r} 18 \\ - 9 \\ \hline \end{array}$	 ____ : ____
$\begin{array}{r} 18 \\ - 7 \\ \hline \end{array}$	$<, >, =$ 54 __, 42	 ____ : ____	$\begin{array}{r} 16 \\ + \square \\ \hline 20 \end{array}$	$\begin{array}{r} 6 \\ 8 \\ + 4 \\ \hline \end{array}$
skip count __, 8, 10	$\begin{array}{r} 15 \\ - \square \\ \hline 6 \end{array}$	$\begin{array}{r} 13 \\ + 6 \\ \hline \end{array}$	$\begin{array}{r} 17 \\ - \square \\ \hline 13 \end{array}$	$\begin{array}{r} 17 \\ - 4 \\ \hline \end{array}$
$\begin{array}{r} 2 \\ 9 \\ + 8 \\ \hline \end{array}$	 ____ : ____	$\begin{array}{r} 3 \\ 8 \\ + 6 \\ \hline \end{array}$	$<, >, =$ 67 __ 48	 _____
$\begin{array}{r} 9 \\ 7 \\ + 4 \\ \hline \end{array}$	$<, >, =$ 51 __ 51	$\begin{array}{r} 14 \\ + 6 \\ \hline \end{array}$	$\begin{array}{r} 19 \\ - \square \\ \hline 6 \end{array}$	 ____ : ____




Name _____



 <div> <div></div> <div>:</div> <div></div> </div>	$\begin{array}{r} 9 \\ - 3 \\ \hline \end{array}$	$\begin{array}{r} 3 \\ + \square \\ \hline 15 \end{array}$		
 <div> <div></div> <div></div> </div>	$\begin{array}{r} 7 \\ + \square \\ \hline 12 \end{array}$	skip count 26, __, 30	$\begin{array}{r} 14 \\ - 5 \\ \hline \end{array}$	$\begin{array}{r} 2 \\ + 8 \\ \hline \end{array}$
$\begin{array}{r} 10 \\ - 7 \\ \hline \end{array}$	$<, >, =$ 19 __ 21	 <div> <div></div> <div>:</div> <div></div> </div>	$\begin{array}{r} 9 \\ + \square \\ \hline 15 \end{array}$	$\begin{array}{r} 4 \\ 2 \\ + 7 \\ \hline \end{array}$
skip count __, 70, 75	$\begin{array}{r} 11 \\ - \square \\ \hline 6 \end{array}$	$\begin{array}{r} 10 \\ + 6 \\ \hline \end{array}$	$\begin{array}{r} 17 \\ - \square \\ \hline 17 \end{array}$	$\begin{array}{r} 11 \\ - 8 \\ \hline \end{array}$
$\begin{array}{r} 7 \\ 4 \\ + 8 \\ \hline \end{array}$	 <div> <div></div> <div>:</div> <div></div> </div>	$\begin{array}{r} 9 \\ 1 \\ + 6 \\ \hline \end{array}$	$<, >, =$ 67 __ 48	 <div> <div></div> <div></div> </div>
$\begin{array}{r} 2 \\ 2 \\ + 2 \\ \hline \end{array}$	$<, >, =$ 51 __ 51	$\begin{array}{r} 10 \\ + 10 \\ \hline \end{array}$	$\begin{array}{r} 11 \\ - \square \\ \hline 9 \end{array}$	 <div> <div></div> <div>:</div> <div></div> </div>




Name _____



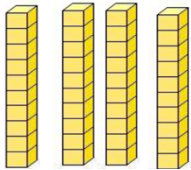
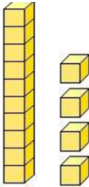



$\begin{array}{r} 1 \\ 4 \\ + 8 \\ \hline \end{array}$	$\begin{array}{r} 18 \\ - 5 \\ \hline \end{array}$	$\begin{array}{r} 11 \\ - \square \\ \hline 3 \end{array}$		
 _____	$\begin{array}{r} 9 \\ + \square \\ \hline 13 \end{array}$	$<, >, =$ $45 \underline{\hspace{1cm}} 33$	$\begin{array}{r} 13 \\ - 7 \\ \hline \end{array}$	$\begin{array}{r} 9 \\ 4 \\ + 7 \\ \hline \end{array}$
$\begin{array}{r} 15 \\ - 3 \\ \hline \end{array}$	$<, >, =$ $10 \underline{\hspace{1cm}} 16$	 _____ : _____	$\begin{array}{r} 5 \\ + \square \\ \hline 13 \end{array}$	$\begin{array}{r} 4 \\ 8 \\ + 4 \\ \hline \end{array}$
$\begin{array}{r} 17 \\ - 2 \\ \hline \end{array}$	$\begin{array}{r} 12 \\ - \square \\ \hline 8 \end{array}$	$\begin{array}{r} 3 \\ 5 \\ + 6 \\ \hline \end{array}$	$\begin{array}{r} 9 \\ - \square \\ \hline 2 \end{array}$	$\begin{array}{r} 17 \\ - \underline{\hspace{1cm}} 4 \\ \hline \end{array}$
$\begin{array}{r} 5 \\ 9 \\ + 8 \\ \hline \end{array}$	 _____ : _____	$\begin{array}{r} 7 \\ 8 \\ + 6 \\ \hline \end{array}$	$<, >, =$ $57 \underline{\hspace{1cm}} 39$	 _____
$\begin{array}{r} 7 \\ + 0 \\ \hline \end{array}$	$\begin{array}{r} 4 \\ 5 \\ + 4 \\ \hline \end{array}$	$\begin{array}{r} 14 \\ + 1 \\ \hline \end{array}$	$\begin{array}{r} 15 \\ - \square \\ \hline 7 \end{array}$	 _____





Name _____

		$\begin{array}{r} 6 \\ 2 \\ + 8 \\ \hline \end{array}$	 _____ : _____	skip count 30, ___, 40
 _____ : _____	$\begin{array}{r} 5 \\ 6 \\ + 4 \\ \hline \end{array}$	$\begin{array}{r} 12 \\ - \square \\ \hline 5 \end{array}$	10 less than 56 _____	$\begin{array}{r} 14 \\ + 5 \\ \hline \end{array}$
$\begin{array}{r} 9 \\ 2 \\ + 5 \\ \hline \end{array}$	10 more than 77 _____	___, 38, 40	$\begin{array}{r} 19 \\ - \square \\ \hline 15 \end{array}$	 _____
$\begin{array}{r} 16 \\ - 8 \\ \hline \end{array}$	$\begin{array}{r} 12 \\ + \square \\ \hline 18 \end{array}$	1 more than 33 _____	skip count 12, 14, ___	$\begin{array}{r} 3 \\ 5 \\ + 7 \\ \hline \end{array}$
<, >, = 32 ___ 29	$\begin{array}{r} 8 \\ 0 \\ + 5 \\ \hline \end{array}$	 _____	 _____ : _____	$\begin{array}{r} 13 \\ - \square \\ \hline 9 \end{array}$
$\begin{array}{r} 16 \\ - 7 \\ \hline \end{array}$	$\begin{array}{r} 6 \\ + \square \\ \hline 15 \end{array}$	1 less than 69 _____	$\begin{array}{r} 5 \\ 2 \\ + 9 \\ \hline \end{array}$	<, >, = 24 ___ 25



Did you like this resource?

Go to my page to purchase Math Skills Resources such as:

Adding 1-10

Subtracting 1-10

Adding & Subtracting 1-10 mixed

Subtracting 1-20

Primary Math Skills Review



<https://www.teacherspayteachers.com/Store/KosmalaKorner>

